



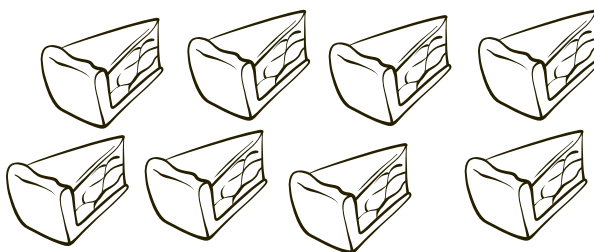
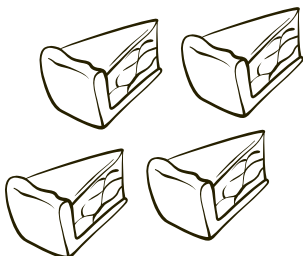
Tulis ayat matematik dan selesaikan.



$$\bigcirc \quad \bigcirc \quad \bigcirc = \bigcirc$$



$$\bigcirc \quad \bigcirc \quad \bigcirc = \bigcirc$$



$$\bigcirc \quad \bigcirc \quad \bigcirc = \bigcirc$$

Selesaikan masalah berikut.

1. 13 tambah 5 sama dengan

$$\square + \square = \square$$

2. Lima belas tolak tiga sama dengan

$$\square \square \square = \square$$

3. 7 tolak 6 sama dengan

$$\square - \square = \square$$

4. Lima puluh tiga tolak 5 sama dengan

$$\square \square \square = \square$$

5. Dua puluh 7 tambah dengan dua

$$\square \square \square = \square$$