
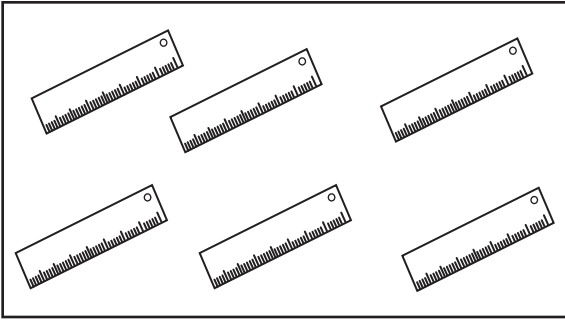
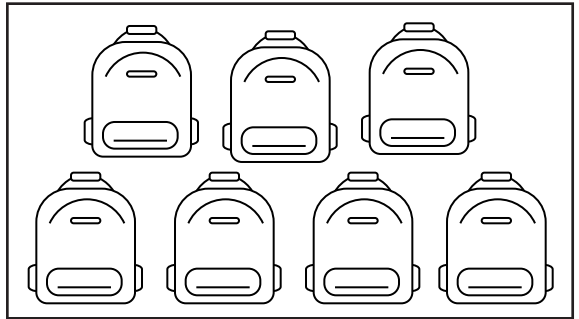
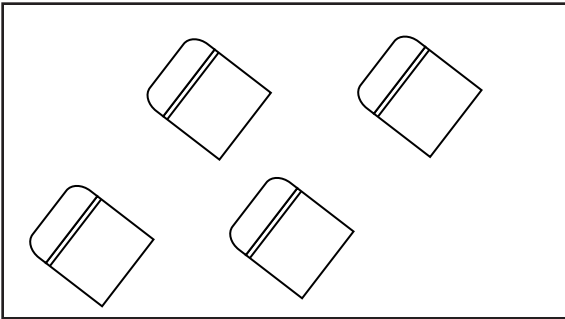


B. Kira dan nyatakan bilangan objek di bawah



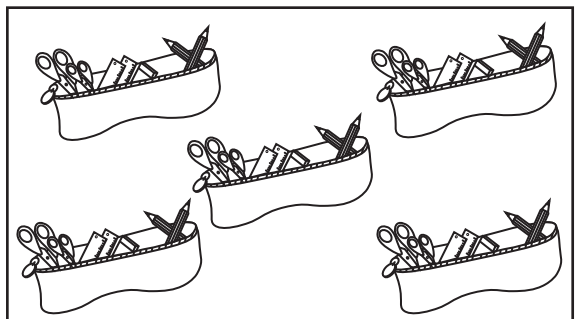
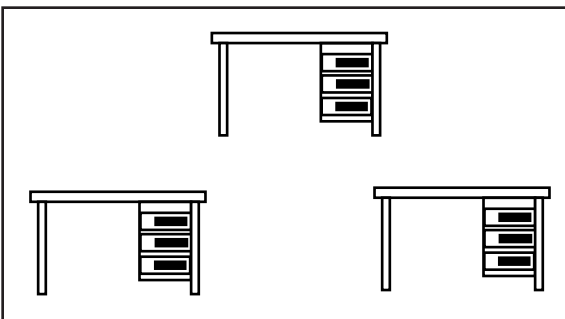
Blank rounded rectangular box for writing the count of rulers.

Blank rounded rectangular box for writing the count of pencils.



Blank rounded rectangular box for writing the count of small rectangular objects.

Blank rounded rectangular box for writing the count of backpacks.



Blank rounded rectangular box for writing the count of desks.

Blank rounded rectangular box for writing the count of baskets.

B. Kira dan nyatakan jumlahnya.

$$\begin{array}{r} 54 \\ - 50 \\ \hline \\ \hline \end{array}$$

$$\begin{array}{r} 17 \\ - 6 \\ \hline \\ \hline \end{array}$$

$$\begin{array}{r} 19 \\ - 4 \\ \hline \\ \hline \end{array}$$

$$\begin{array}{r} 90 \\ - 1 \\ \hline \\ \hline \end{array}$$

$$\begin{array}{r} 43 \\ - 3 \\ \hline \\ \hline \end{array}$$

$$\begin{array}{r} 78 \\ - 13 \\ \hline \\ \hline \end{array}$$