
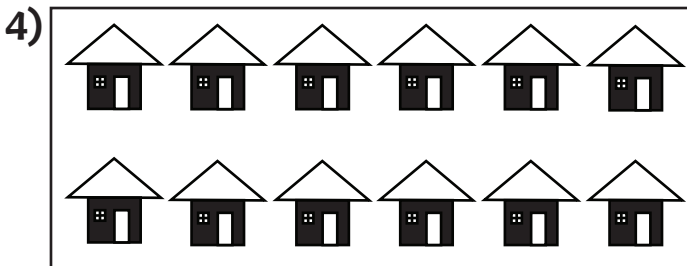
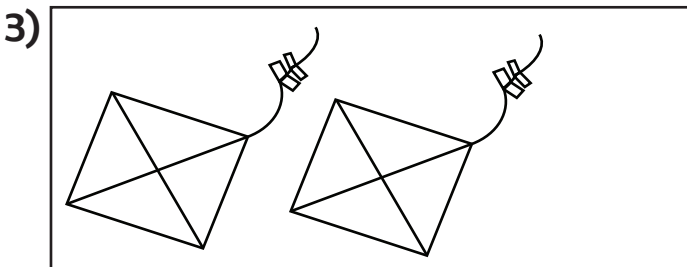
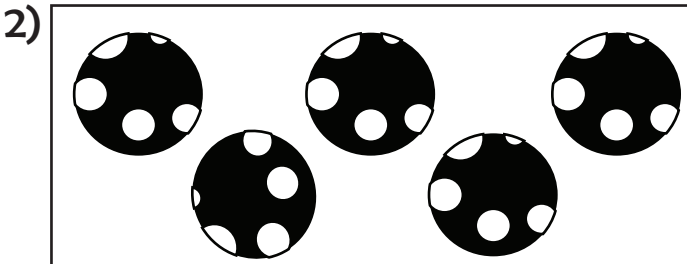



PRAKTIS 1: NOMBOR HINGGA 100

A. Hitung dan warnakan bulatan nombor yang betul.



B. Susun nombor berikut mengikut tertib yang diberi.

1

4 2
5 1 3

Tertib Menurun

2

14 18
17 15 16

Tertib Menaik

3

37 40
39 41 38

Tertib Menaik

4

66 67
69 68 65

Tertib Menurun

5

51 52
54 50 53

Tertib Menaik